

Mathematics Assessment (CfE) - Level 2

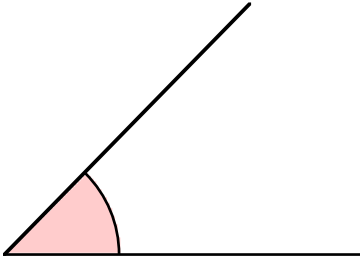
(MTH 2 - 17b)

I can accurately measure and draw angles using appropriate equipment, applying my skills to problems in context.

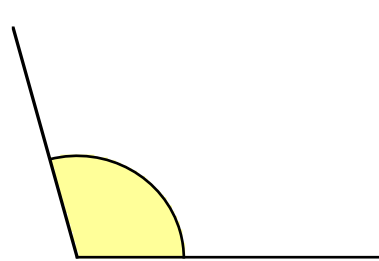
You will need a ruler and a pencil for this assessment.

1. Measure each of the following angles and write down its size :-

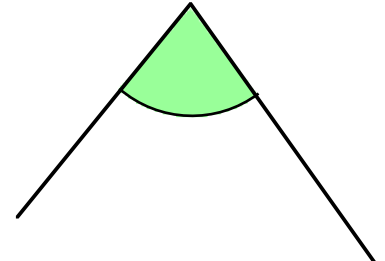
a



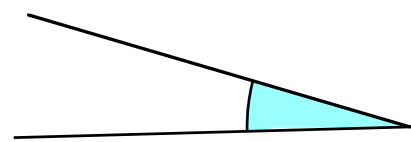
b



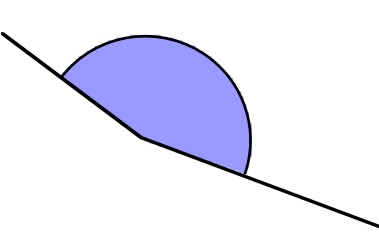
c



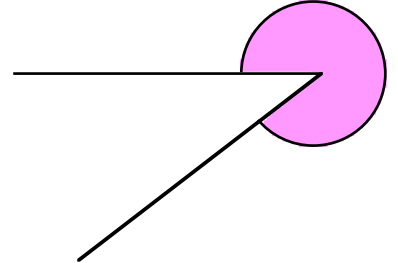
d



e



f



2. Use a ruler and protractor to draw the following angles.

(Mark the sizes of each angle on your drawing).

a 70°

b 140°

c 23°

d 118°

e 180°

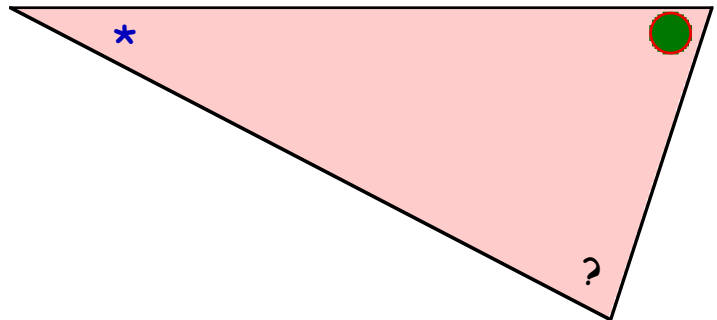
f 210° .

3. Measure the angle marked :-

a *

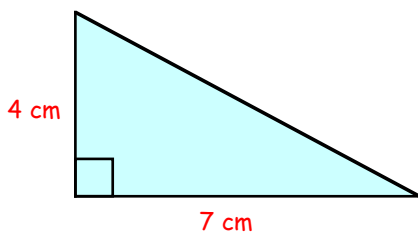
b ●

c ?

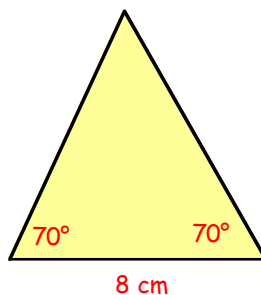


4. Make **accurate** full size drawings of each of the triangles shown below :-

a



b



c

